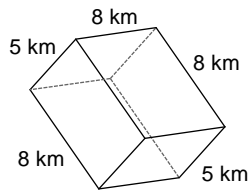


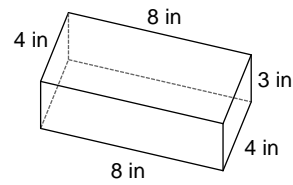
Finding the Volume of a Rectangular Prism

Find the volume of each figure. Round to the nearest tenth.

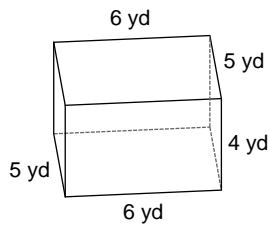
1)



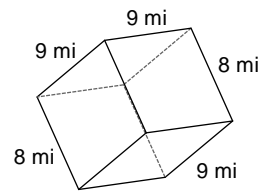
2)



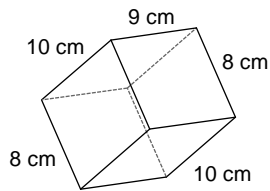
3)



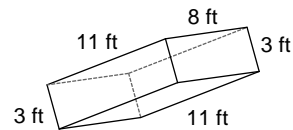
4)



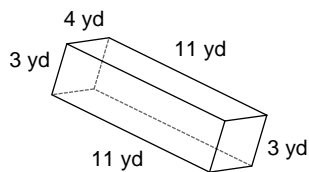
5)



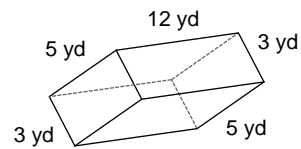
6)



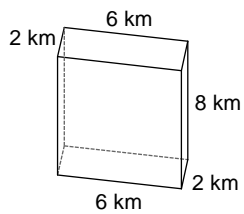
7)



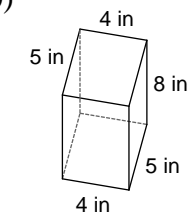
8)



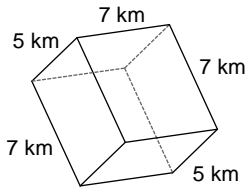
9)



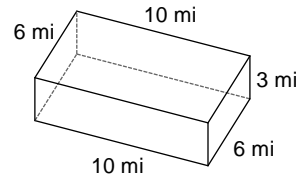
10)



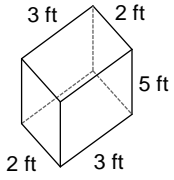
11)



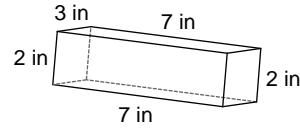
12)



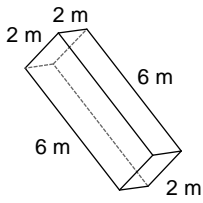
13)



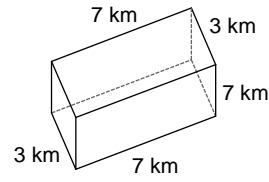
14)



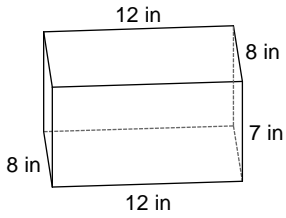
15)



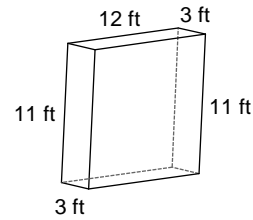
16)



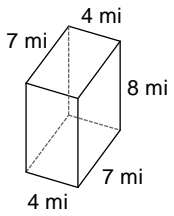
17)



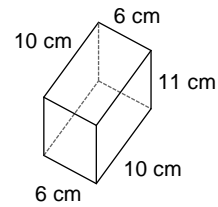
18)



19)



20)



Answers to Finding the Volume of a Rectangular Prism

1) 320 km^3

5) 720 cm^3

9) 96 km^3

13) 30 ft^3

17) 672 in^3

2) 96 in^3

6) 264 ft^3

10) 160 in^3

14) 42 in^3

18) 396 ft^3

3) 120 yd^3

7) 132 yd^3

11) 245 km^3

15) 24 m^3

19) 224 mi^3

4) 648 mi^3

8) 180 yd^3

12) 180 mi^3

16) 147 km^3

20) 660 cm^3