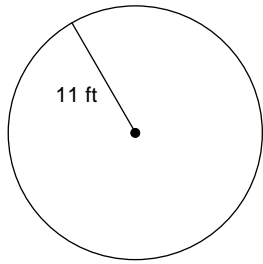


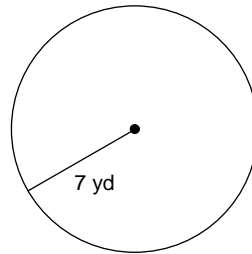
Finding the Circumference of a Circle

Find the circumference of each circle. Round to the nearest tenth.

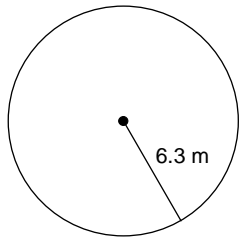
1)



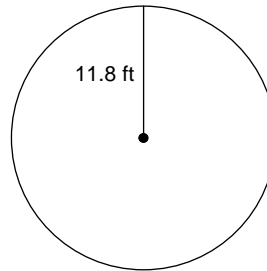
2)



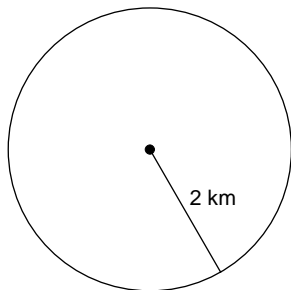
3)



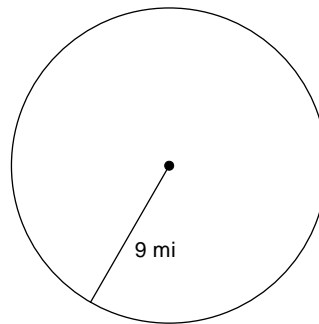
4)



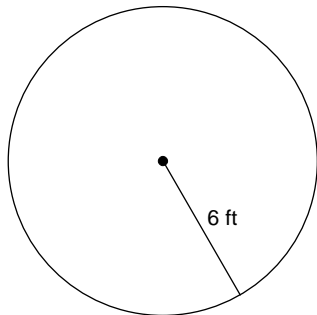
5)



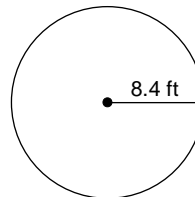
6)



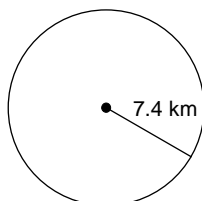
7)



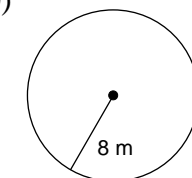
8)



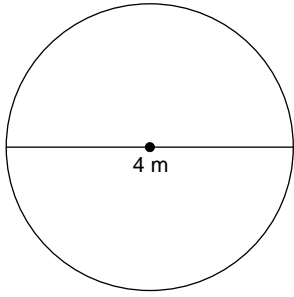
9)



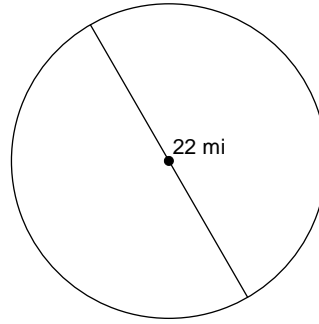
10)



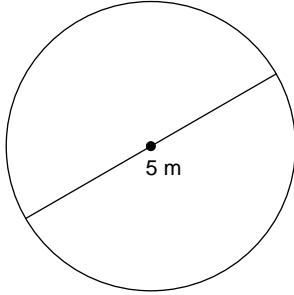
11)



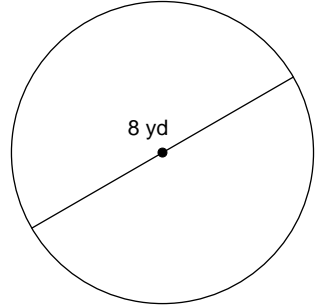
12)



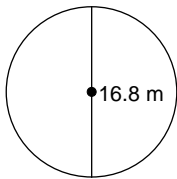
13)



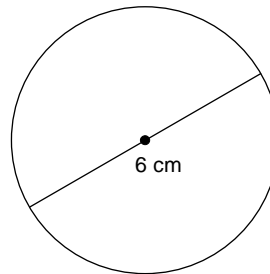
14)



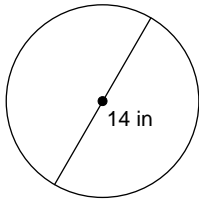
15)



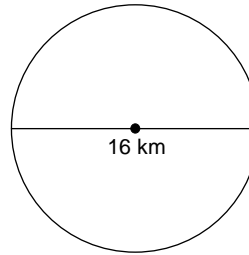
16)



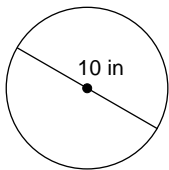
17)



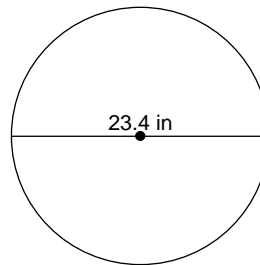
18)



19)



20)



Answers to Finding the Circumference of a Circle

- | | | | |
|------------|-------------|-------------|-------------|
| 1) 69.1 ft | 2) 44 yd | 3) 39.6 m | 4) 74.1 ft |
| 5) 12.6 km | 6) 56.5 mi | 7) 37.7 ft | 8) 52.8 ft |
| 9) 46.5 km | 10) 50.3 m | 11) 12.6 m | 12) 69.1 mi |
| 13) 15.7 m | 14) 25.1 yd | 15) 52.8 m | 16) 18.8 cm |
| 17) 44 in | 18) 50.3 km | 19) 31.4 in | 20) 73.5 in |